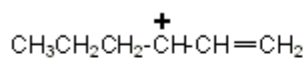
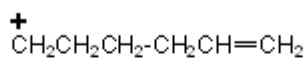
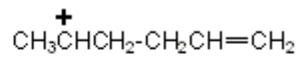


Quiz 13

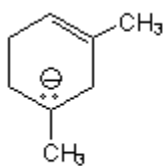
1. Place the following carbocations in order of increasing stability (1=least, 3=most stable).

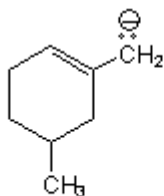


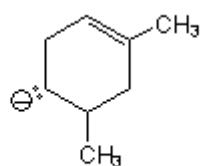


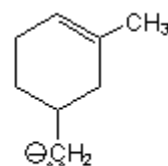


2. Place the following carbanions in order of increasing stability (1=least, 4=most stable).









3. Label each of the following pairs of compounds as identical, structural isomers, enantiomers, or diastereomers.

